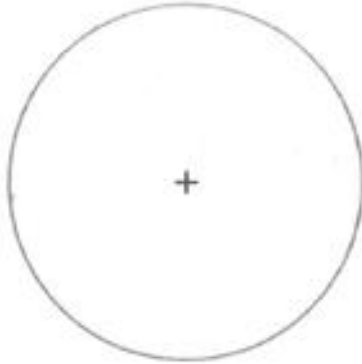


Y9 BT & BGT Worksheet # 7

Note: Students to attempt this at the back of their exercise book.


GIVEN : A CIRCLE

REQUIRED: DIVIDE THE CIRCLE INTO TWELVE EQUAL PARTS.



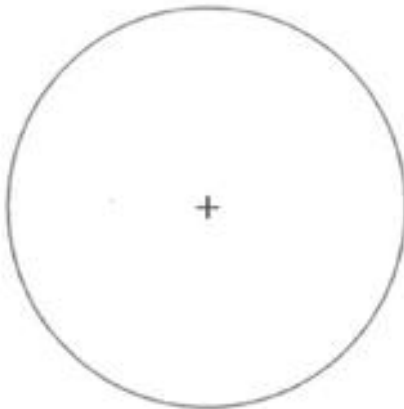
GIVEN : A CIRCLE

REQUIRED: FIND THE CENTRE OF THE CIRCLE AND DIVIDE IT INTO EIGHT EQUAL PARTS.



GIVEN : A CIRCLE

REQUIRED: DIVIDE THE CIRCLE INTO SIXTEEN EQUAL PARTS.



GIVEN : ARCS

REQUIRED: FIND ITS CENTRE AND COMPLETE THE CIRCLE.



NAME: _____

YEAR: _____

DATE: _____

SHEET NO: 27